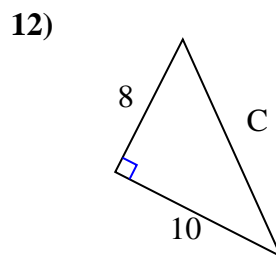
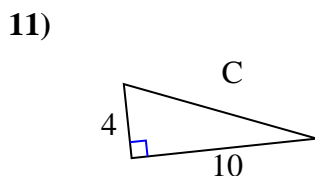
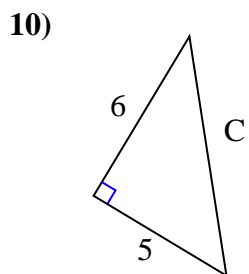
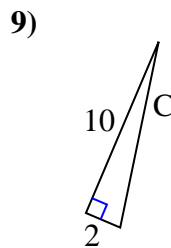
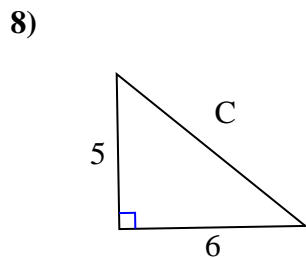
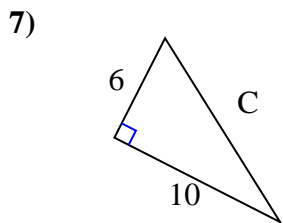
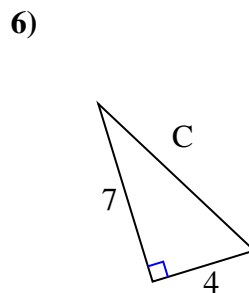
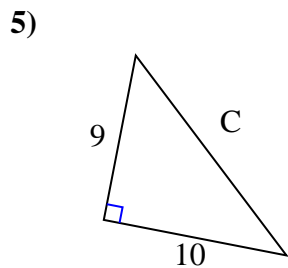
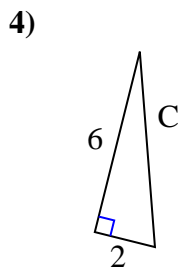
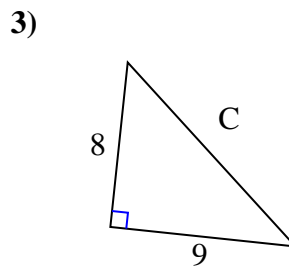
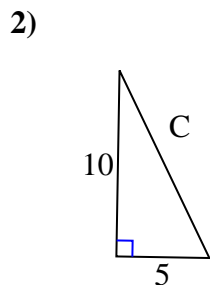
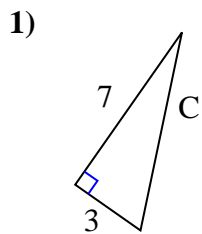




Find the value of 'C' round your answer to the nearest hundredth.

Answers

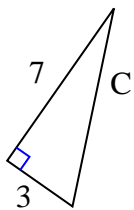


1. \_\_\_\_\_
2. \_\_\_\_\_
3. \_\_\_\_\_
4. \_\_\_\_\_
5. \_\_\_\_\_
6. \_\_\_\_\_
7. \_\_\_\_\_
8. \_\_\_\_\_
9. \_\_\_\_\_
10. \_\_\_\_\_
11. \_\_\_\_\_
12. \_\_\_\_\_



Find the value of 'C' round your answer to the nearest hundredth.

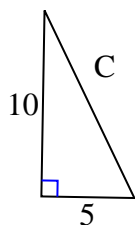
1)



$$49 + 9 = 58$$

$$\sqrt{58} = 7.62$$

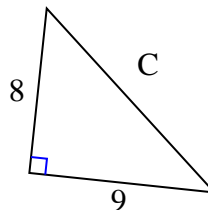
2)



$$100 + 25 = 125$$

$$\sqrt{125} = 11.18$$

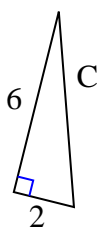
3)



$$64 + 81 = 145$$

$$\sqrt{145} = 12.04$$

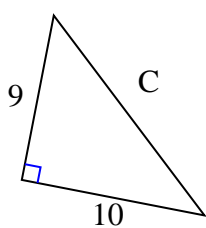
4)



$$36 + 4 = 40$$

$$\sqrt{40} = 6.32$$

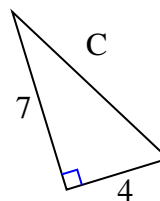
5)



$$81 + 100 = 181$$

$$\sqrt{181} = 13.45$$

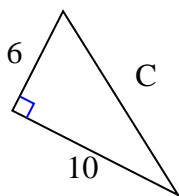
6)



$$49 + 16 = 65$$

$$\sqrt{65} = 8.06$$

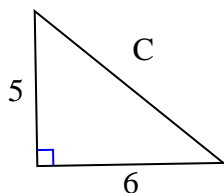
7)



$$36 + 100 = 136$$

$$\sqrt{136} = 11.66$$

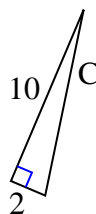
8)



$$25 + 36 = 61$$

$$\sqrt{61} = 7.81$$

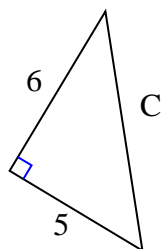
9)



$$100 + 4 = 104$$

$$\sqrt{104} = 10.2$$

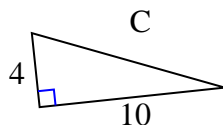
10)



$$36 + 25 = 61$$

$$\sqrt{61} = 7.81$$

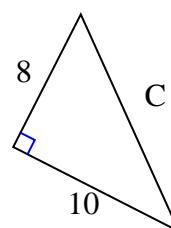
11)



$$16 + 100 = 116$$

$$\sqrt{116} = 10.77$$

12)



$$64 + 100 = 164$$

$$\sqrt{164} = 12.81$$

Answers1. 7.622. 11.183. 12.044. 6.325. 13.456. 8.067. 11.668. 7.819. 10.210. 7.8111. 10.7712. 12.81